



NAME _____ DATE _____

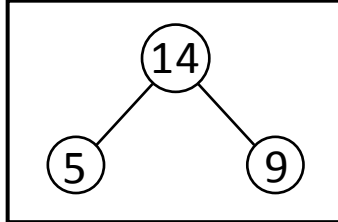
ADDITION WORD PROBLEMS

Verify the work done by 3 friends stated as under. One of the works is wrong make it in correct procedure.


1. There are some cows. 5 cows are eating grass and 9 cows are sleeping. How many cows are there?



$$5 + 9 = 14$$




$$14 = 5 + 9$$

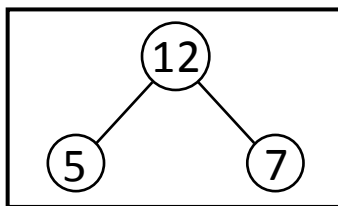


$$5 + 9 = 14$$


2. Paul has 5 strawberries in cupboard and 7 strawberries in the lunch box. How many strawberries Paul has?



$$5 + 7 = 12$$



$$5 + 7 = 12$$



$$5 + 7 = 12$$